

Name: _____ Class: _____ Date: _____

Worksheet 4

Rounding Amounts of Money


1 Round each amount to the nearest £.

(a)



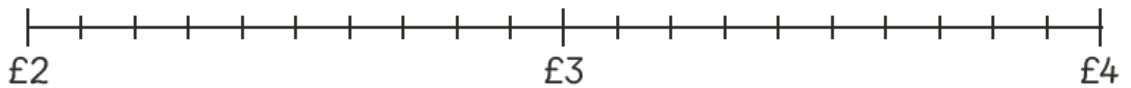
£1.60 \approx

(b)



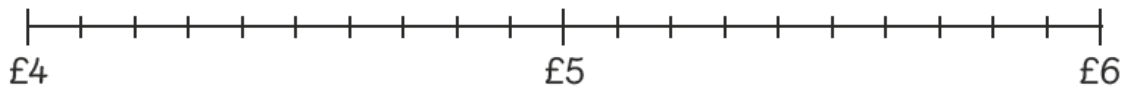
£2.45 \approx

(c)




£3.80 \approx


(d)




£4.50 \approx

2 Round the price of each item to the nearest £ and to the nearest £10.

(a)  $£15.80 \approx$ (to the nearest £)
 $£15.80 \approx$ (to the nearest £10)

(b)  $£23.25 \approx$ (to the nearest £)
 $£23.25 \approx$ (to the nearest £10)

(c)  $£37.90 \approx$ (to the nearest £)
 $£37.90 \approx$ (to the nearest £10)

3 Complete the table.

	Round to the nearest £	Round to the nearest £10
£9.11		
£12.64		
£15.43		
£28.50		