

## Think together

- 1 Choose  $<$ ,  $>$  or  $=$  to complete the sentences.

$38 \bigcirc 31$


$31 \bigcirc 26$

$26 \bigcirc 38$


- 2 Look at the number cards. Use the cards to make a 2-digit number to go in each circle.




Greater than  
60



Between  
58 and 68



In the sequence  
that starts 0, 5,  
10, 15, 20 ...



CHALLENGE