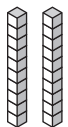

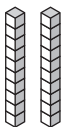
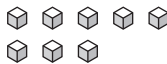


Comparing numbers 2

- I** Write 'greater than', 'less than' or 'equal to' to compare the numbers. Then use $<$, $>$ or $=$ to complete the number sentence.

a)


Tens	Ones
	

Tens	Ones
	

25 is _____ 28

This is because .

b)



40 is _____ 40

.

Remember to
compare the
tens first and
then the ones.

