

Angles

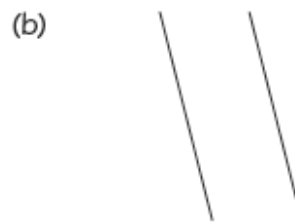
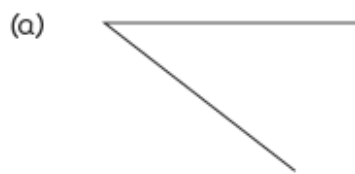
Chapter 12

Name: _____ Class: _____ Date: _____

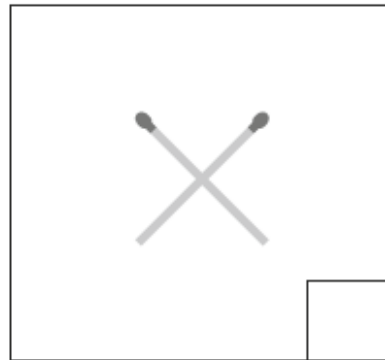
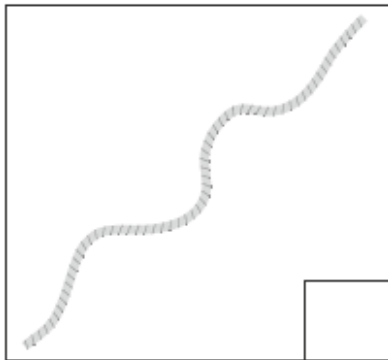
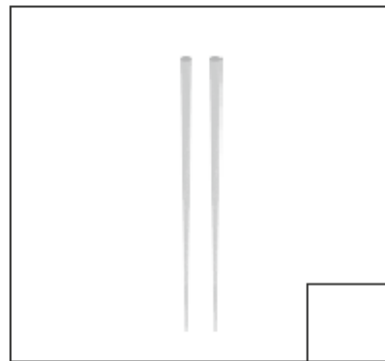
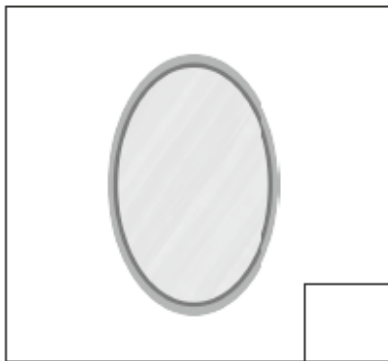
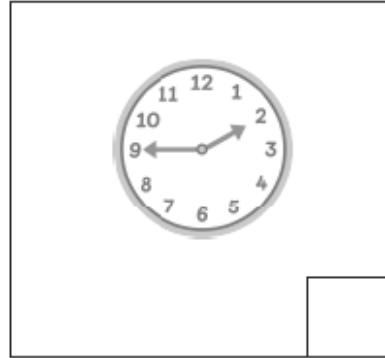
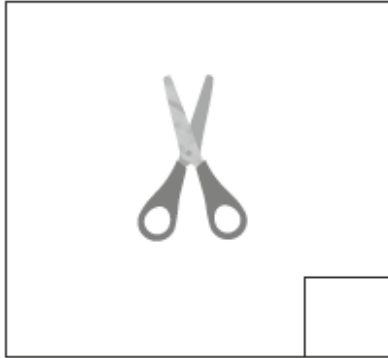
Worksheet 1

Making Angles

- 1 Each figure below is made up of two lines.
Circle the figures that form angles.



2 Put a tick (✓) for objects that make angles and put a cross (X) for objects that do not make angles.



3 Cross out the letters that do not form angles.

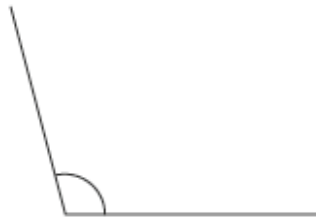
D W

E N U


S T Z

Write down another letter not shown above that does not form angles.

- 4 The figure below shows two lines forming an angle.



- (a) Draw two lines to make an angle smaller than the angle shown above. Mark the angle.



- (b) Draw two lines to make an angle larger than the angle shown above. Mark the angle.

