





Dinosaur Addition

Write down the answers in the circles.



Dinosaur Addition

Write down the answers in the circles.

$$3 + \text{2 dinosaurs} = \bigcirc$$

$$1 + \text{1 dinosaur} = \bigcirc$$

$$3 + \text{1 dinosaur} = \bigcirc$$

$$5 + \text{2 dinosaurs} = \bigcirc$$


$$5 + \text{5 dinosaurs} = \bigcirc$$

Dinosaur Addition


Write down the answers in the circles.

 $3 + 2 = \bigcirc$

$\bigcirc + 2 + \text{Triceratops} = 4$

 $3 + \bigcirc = 5$

$1 + 3 + \text{Two giraffes} = \bigcirc$

 $5 + 5 = \bigcirc$