




Name: \_\_\_\_\_

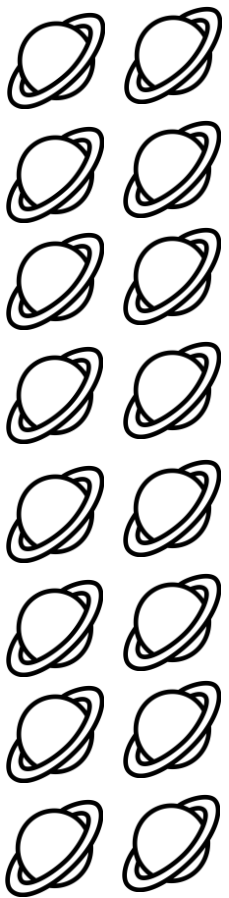
Date: \_\_\_\_\_

Match each number to the correct group


8




9



5



16



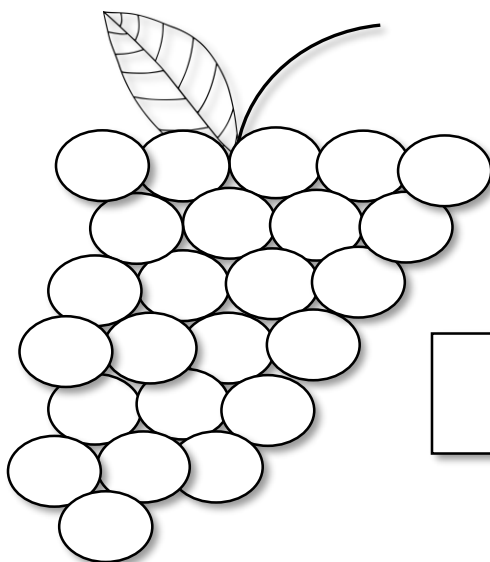
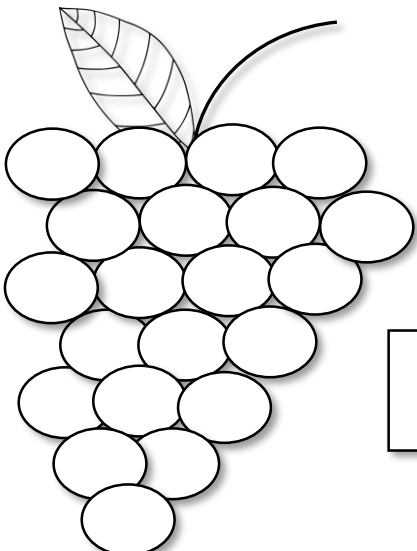




13



Name: \_\_\_\_\_

Date: \_\_\_\_\_

**Count the grapes in each bunch. How many are there?**





Name: \_\_\_\_\_

Date: \_\_\_\_\_

**Trace the numbers and then write your own**


1	1	1	_____	_____	_____
2	2	2	_____	_____	_____
3	3	3	_____	_____	_____
4	4	4	_____	_____	_____
5	5	5	_____	_____	_____
6	6	6	_____	_____	_____
7	7	7	_____	_____	_____
8	8	8	_____	_____	_____
9	9	9	_____	_____	_____




Name: \_\_\_\_\_

Date: \_\_\_\_\_

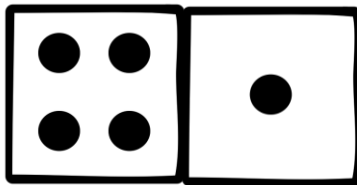
Write and draw the dots on the dominoes



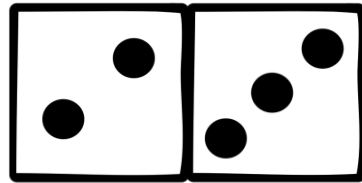
$$\underline{\quad} + \underline{\quad} = \underline{\quad}$$



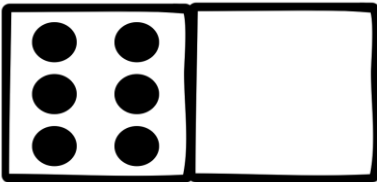
$$\underline{\quad} + \underline{\quad} = \underline{\quad}$$




$$\underline{\quad} + \underline{\quad} = \underline{\quad}$$




$$\underline{\quad} + \underline{\quad} = \underline{\quad}$$




$$\underline{\quad} + \underline{3} = \underline{\quad}$$



$$\underline{\quad} + \underline{4} = \underline{\quad}$$



$$\underline{5} + \underline{\quad} = \underline{\quad}$$




$$\underline{6} + \underline{\quad} = \underline{\quad}$$




Name: \_\_\_\_\_

Date: \_\_\_\_\_


Write and draw the dots on the dominoes




$$\underline{\quad} + \underline{\quad} = \underline{\quad}$$



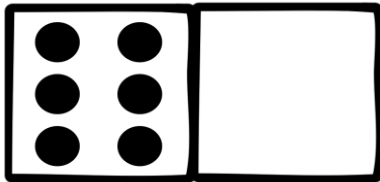
$$\underline{\quad} + \underline{\quad} = \underline{\quad}$$



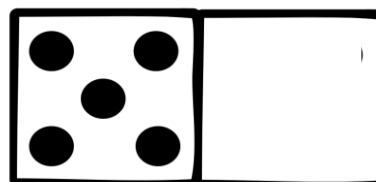
$$\underline{\quad} + \underline{\quad} = \underline{\quad}$$



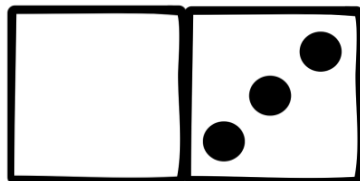
$$\underline{\quad} + \underline{\quad} = \underline{\quad}$$



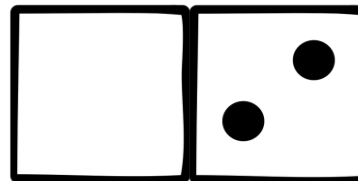
$$\underline{\quad} + \underline{2} = \underline{\quad}$$



$$\underline{\quad} + \underline{1} = \underline{\quad}$$



$$\underline{3} + \underline{\quad} = \underline{\quad}$$



$$\underline{4} + \underline{\quad} = \underline{\quad}$$