

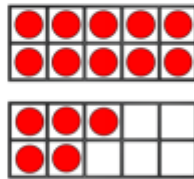

Task: To count objects to 100.

Count and write the number of cars in the car park.



There are \_\_\_\_\_ cars in the car park.

What numbers are represented below?  
Write your answer in numerals and words.



Match the numerals to the words.

17

48

38

70


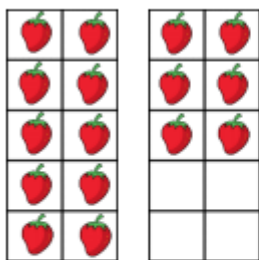
thirty-eight

seventy

forty-eight

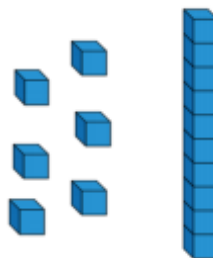
seventeen

Here are two sets of objects.



Which are easier to count?  
Explain your answer.

Jack says he has 61  
Is he correct?



Explain your reasoning.