



2 Times Table Activities

Count in 2s and colour in the grid:

1	2	3	4	5
6	7	8	9	10
11	12	13	14	15
16	17	18	19	20
21	22	23	24	25

How many ears are there?

a)  _____ x _____ = _____

b)  _____ x _____ = _____

Work out these answers:

a) $1 \times 2 =$ _____

g) $2 \times 2 =$ _____

b) $3 \times 2 =$ _____

h) $4 \times 2 =$ _____

c) $5 \times 2 =$ _____

i) $6 \times 2 =$ _____

d) $7 \times 2 =$ _____


j) $8 \times 2 =$ _____

e) $9 \times 2 =$ _____

k) $10 \times 2 =$ _____

f) $11 \times 2 =$ _____

l) $12 \times 2 =$ _____

c)  _____ x _____ = _____

d)  _____ x _____ = _____

WALT: use our knowledge of multiplying by 2 and doubling to solve problems.



The Magic Plant

On Friday the magic plant was only 2 centimetres tall.

Every day it doubled its height. How tall was it on Monday?

How tall will the plant be on Saturday at 9am?

How tall will the plant be on Sunday at 9am?