

Task: To make tally charts and to reason and problem solve about them.

Complete the tally chart.





Favourite Colour	Tally	Total
Blue		
Red		
Yellow		
Green		

What does the data tell you? Tell me the story.

Complete the tally chart for Year 2 and Year 3


Year Group	Tally	Total
Year 1		10
Year 2		19
Year 3		
Year 4		17

Dexter makes a tally chart of the animals he saw at the zoo


Animal	Tally
	
	
	
	

Tick one box below that shows all of the animals Dexter saw and explain why the others are incorrect.


Box 1



Box 2



Box 3



Box 4

