

















Task: To draw pictograms (1:1).

7a. Maisy was drawing a pictogram to show the favourite colours in Year 2.

Class 2a		Class 2b	
Blue	   	Red	 
Green	   	Blue	 
Red		Yellow	  

Use Maisy's information to draw one vertical pictogram to show both sets of information.



PS

8a. A class collected information about visitors to their school.



There were twice as many women as men.

I saw 2 dogs and 14 women.



I saw 36 visitors altogether.



There were 6 more children than men.



Use the statements to draw a pictogram.



PS

1. Rosie and Josh are drawing pictograms using the statements below. Their pictograms are different, but both are correct.

Summer is the most popular.

Half the people that like summer chose autumn.


Winter was more popular than spring.

Between 25 and 45 people were asked.

Spring was the least popular.

No more than 15 people said summer was their favourite.

Winter	
Spring	
Summer	
Autumn	

 = 1 person

Investigate the different ways Rosie and Josh can complete their pictograms.

DP