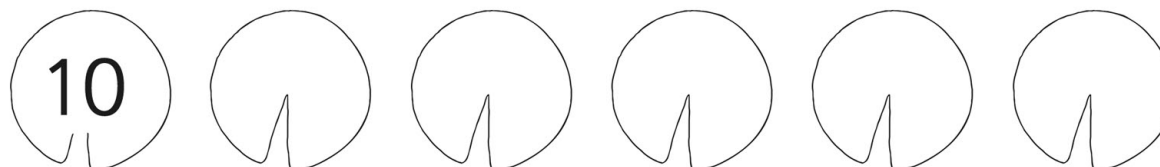


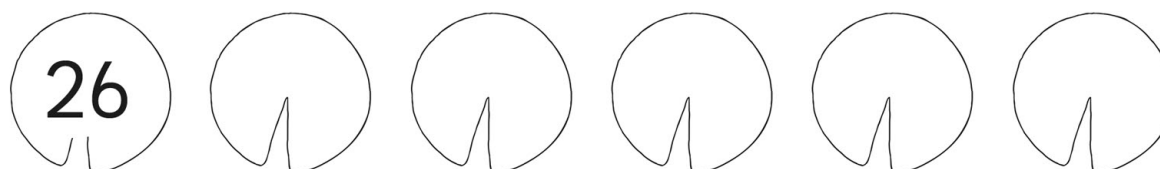
Lily Pad Numbers – Counting in 10s

Complete the sequence on the lily pads. Make sure you follow the rule!

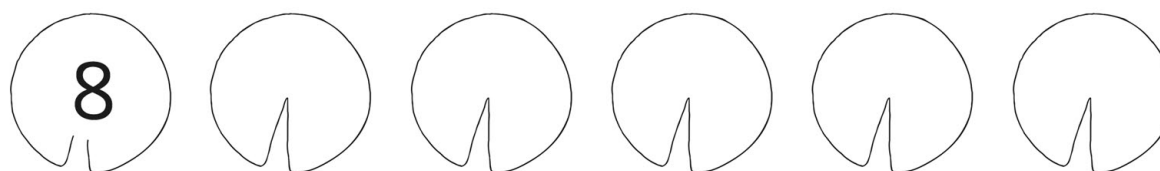
1. Add 10 each time.



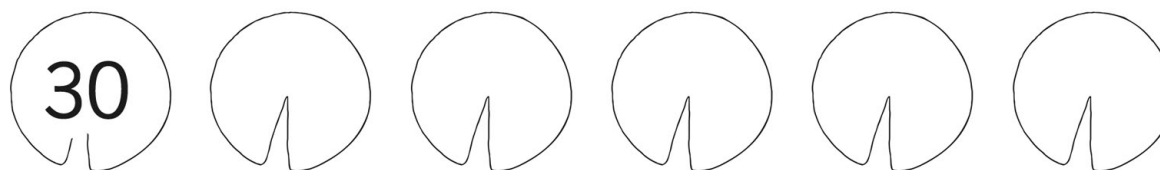
2. Add 10 each time.



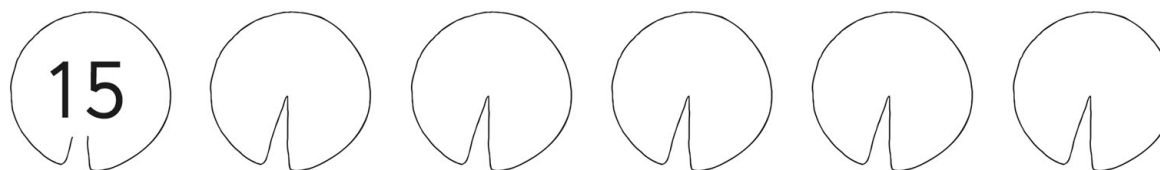
3. Add 10 each time.



4. Add 10 each time.



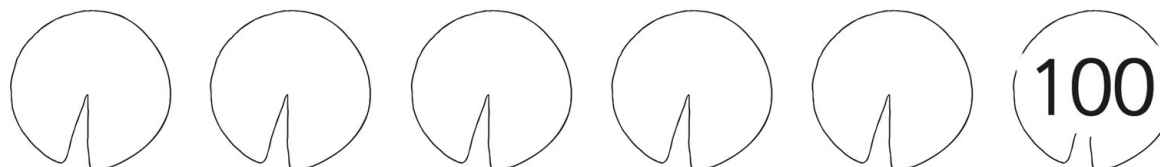
5. Add 10 each time.



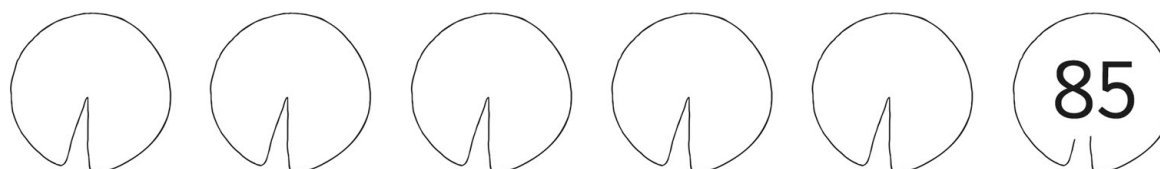
Lily Pad Numbers – Counting in 10s

Complete the sequence on the lily pads. Make sure you follow the rule!

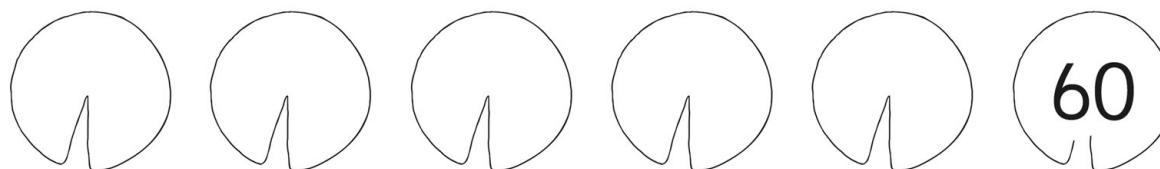
6. Take away 10 each time.



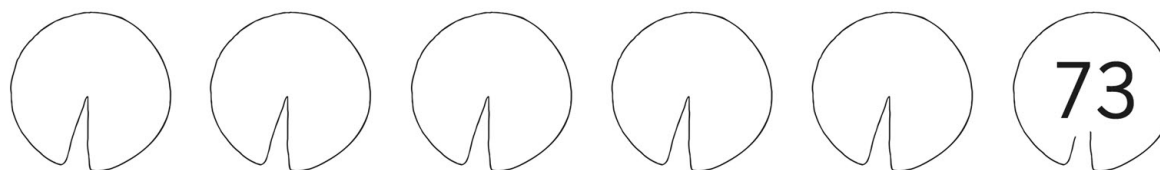
7. Take away 10 each time.



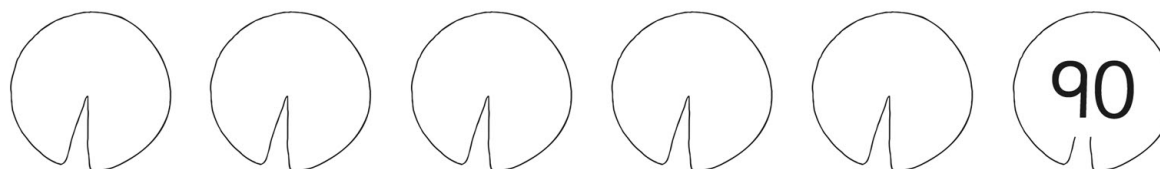
8. Take away 10 each time.



9. Take away 10 each time.



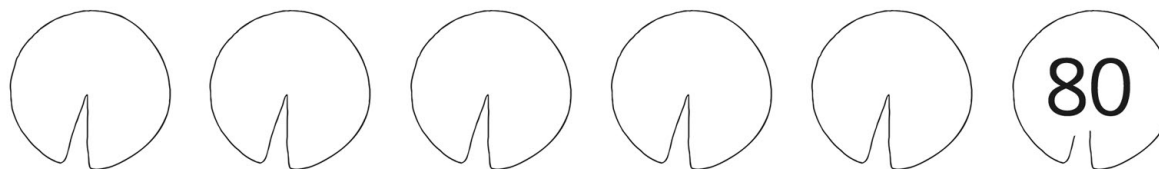
10. Take away 10 each time.



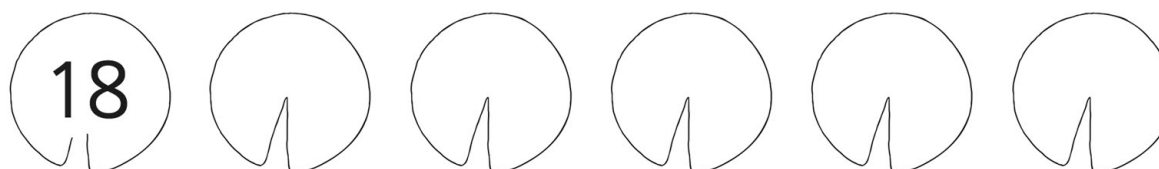
Lily Pad Numbers – Counting in 10s

Complete the sequence on the lily pads. Make sure you follow the rule!

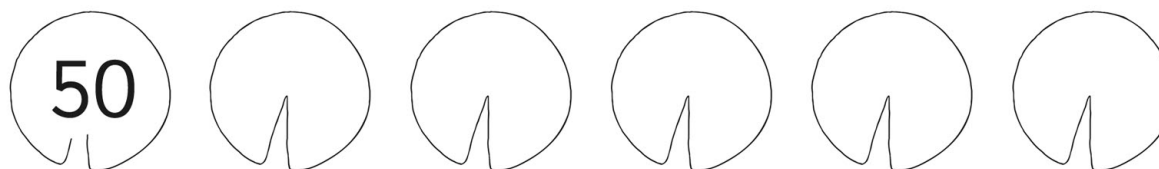
11. Take away 10 each time.



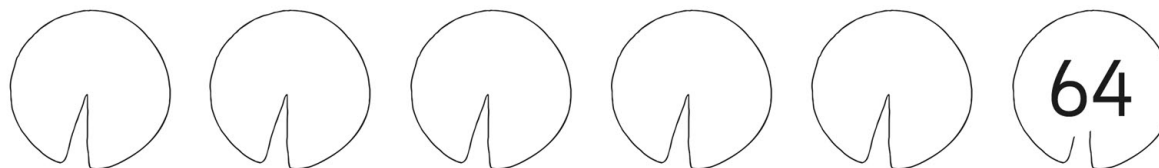
12. Add 10 each time.



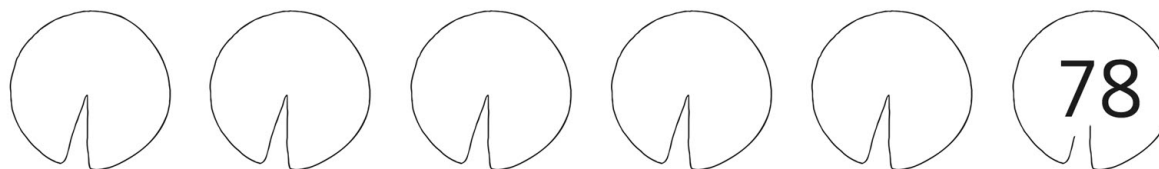
13. Add 10 each time.



14. Take away 10 each time.



15. Take away 10 each time.



Lily Pad Numbers - Counting in 10s - Answers

- 1) 10, 20, 30, 40, 50, 60
- 2) 26, 36, 46, 56, 66, 76
- 3) 8, 18, 28, 38, 48, 58
- 4) 30, 40, 50, 60, 70, 80
- 5) 15, 25, 35, 45, 55, 65
- 6) 100, 90, 80, 70, 60, 50
- 7) 85, 75, 65, 55, 45, 35
- 8) 60, 50, 40, 30, 20, 10
- 9) 73, 63, 53, 43, 33, 23
- 10) 90, 80, 70, 60, 50, 40
- 11) 80, 70, 60, 50, 40, 30
- 12) 18, 28, 38, 48, 58, 68
- 13) 50, 60, 70, 80, 90, 100
- 14) 64, 54, 44, 34, 24, 14
- 15) 78, 68, 58, 48, 38, 28