

Counting in Tenths

Lesson 1


In Focus



How much of the chocolate bar does each child get?

Let's Learn

- 1 The chocolate bar is cut into 10 pieces.

 is 1 tenth of the bar.



$$\frac{1}{10}$$



- 2  is 2 tenths of the bar.



$$\frac{2}{10}$$



3

 is 3 tenths.

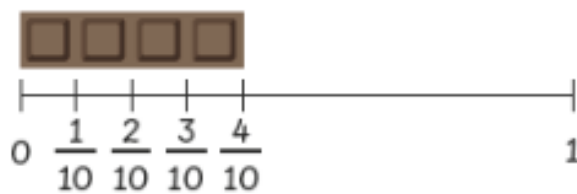


$$\frac{3}{10}$$



4

 is 4 tenths.

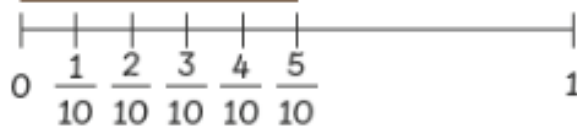


$$\frac{4}{10}$$

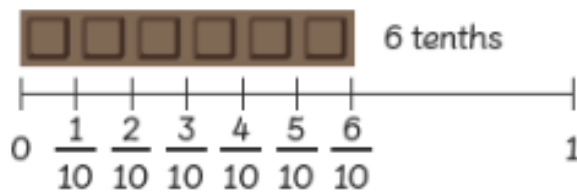


5

 5 tenths



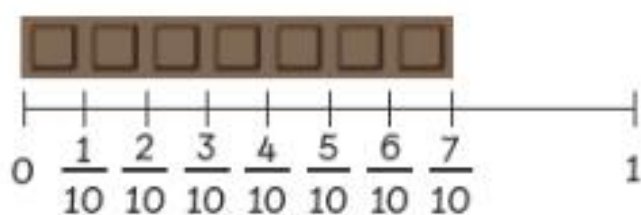
$$\frac{5}{10}$$



6 tenths

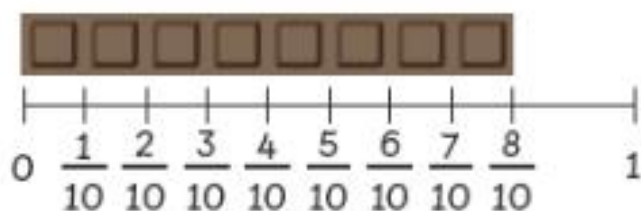
$$\frac{6}{10}$$





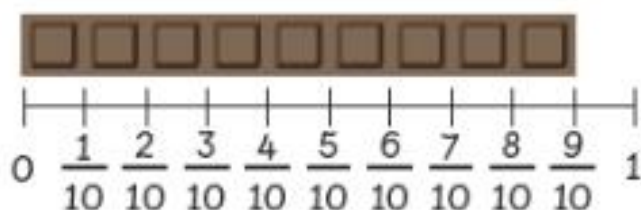
7 tenths

$$\frac{7}{10}$$



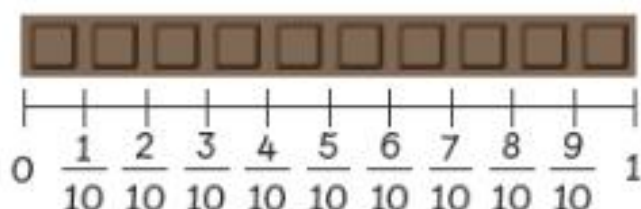
8 tenths

$$\frac{8}{10}$$



9 tenths

$$\frac{9}{10}$$



10 tenths = 1 one

$$\frac{10}{10}$$



6 Count in tenths.

0, $\frac{1}{10}$, $\frac{2}{10}$, $\frac{3}{10}$, , $\frac{5}{10}$, $\frac{6}{10}$, , , $\frac{9}{10}$,

7 Count backward in tenths.

$\frac{10}{10}$, $\frac{9}{10}$, $\frac{8}{10}$, , $\frac{6}{10}$, $\frac{5}{10}$, $\frac{4}{10}$, , , , 0