

## Comparing Angles

**1** Circle the largest angle in each figure.

(a)



(b)



(c)



(d)

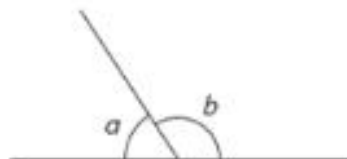


(e)



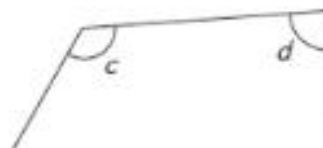
**2** Which angle is smaller?

(a)



Angle  is smaller than angle .


(b)



Angle  is smaller than angle .

**3** Which angle is the smallest?

(a)



Angle

(b)



Angle

4 Arrange each group of angles from the largest to the smallest.

(a)



angle , angle , angle

(b)



angle , angle , angle

(c)



angle , angle , angle , angle