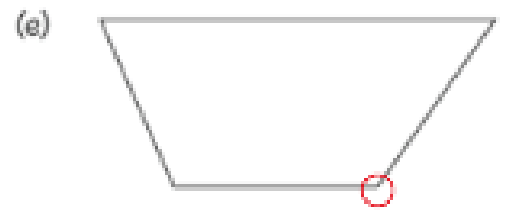
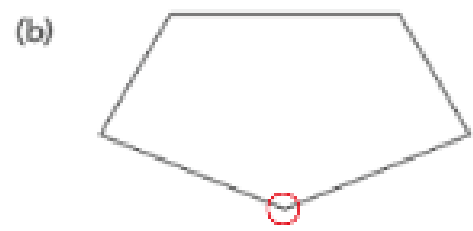
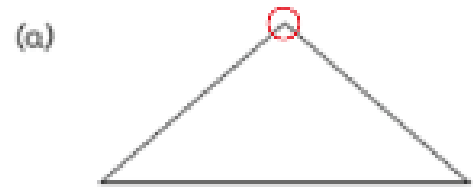


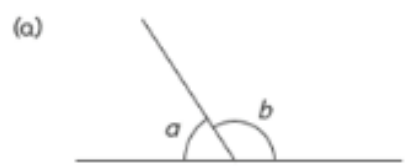
# Worksheet 2

## Comparing Angles

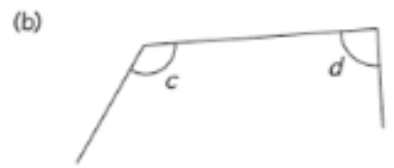
1 Circle the largest angle in each figure.



2 Which angle is smaller?

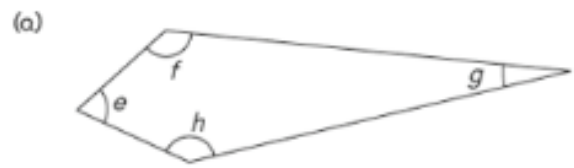


Angle  is smaller than angle .




Angle  is smaller than angle .

3 Which angle is the smallest?



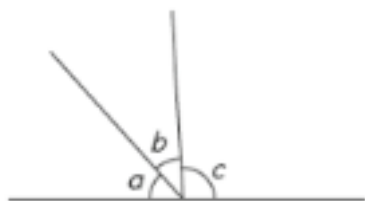
Angle



Angle

4 Arrange each group of angles from the largest to the smallest.

(a)



angle  , angle  , angle

(b)



angle  , angle  , angle

(c)



angle  , angle  , angle  , angle