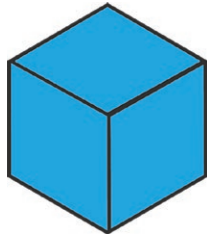


# 3D Shapes

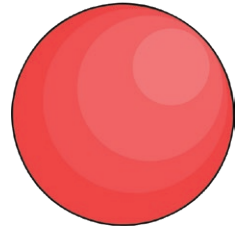
## I Spy and Count to 20 Checklist

Count the number of each type of 3D shape and write the numeral in the box.

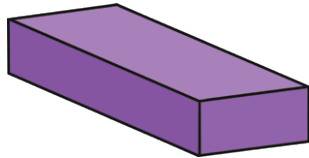
cubes



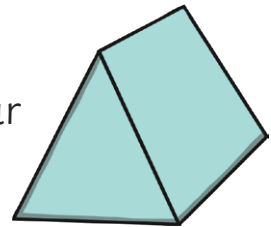
spheres



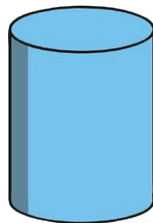
cuboids



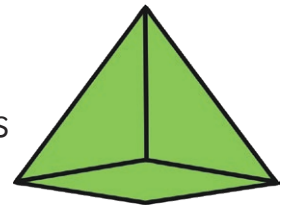
triangular  
prisms



cylinders



pyramids



cones

