

Name: \_\_\_\_\_ Class: \_\_\_\_\_ Date: \_\_\_\_\_

## Worksheet 3


### Measuring Height and Length Using Body Parts

Holly uses parts of her body to measure objects.

Guess the length of each object.

Match it to the correct measurement.

door mat



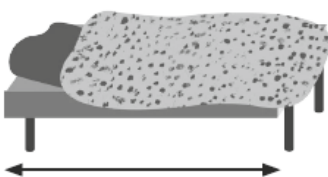
can



television



bed



It is about 1



long.

It is about 11




long.

It is about 1



long.

It is about 1



long.

